

Counting objects (up to 20)

Grade 1 Counting Worksheet

Count the objects and write the total.

1) = _____

2) = _____

3) = _____

4) = _____

5) = _____

6) = _____

7) = _____

8) = _____

9) = _____

10) = _____

11) = _____

12) = _____

13) = _____


14) = _____

Counting objects (up to 20)


Grade 1 Counting Worksheet


Count the objects and write the total.


1)  = 10

2)  = 4

3)  = 17


4)  = 20

5)  = 12


6)  = 8

7)  = 18

8)  = 15

9)  = 16

10)  = 19

11)  = 13

12)  = 11

13)  = 6

14)  = 7