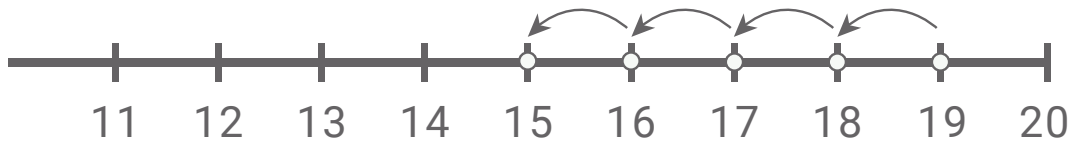


## Subtract with number lines

Kindergarten Subtraction Worksheet

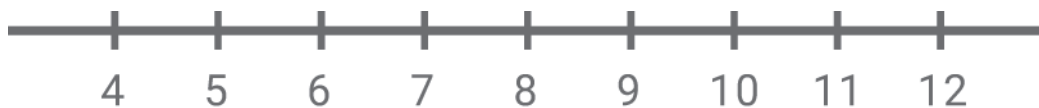
Draw the subtraction hops. Write the missing number.



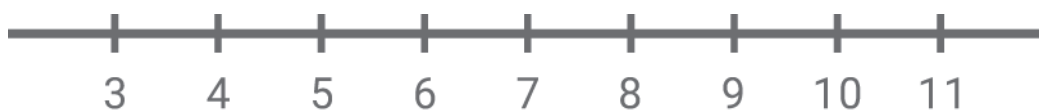
$$19 - \square = 15$$



$$17 - \square = 11$$



$$12 - \square = 8$$

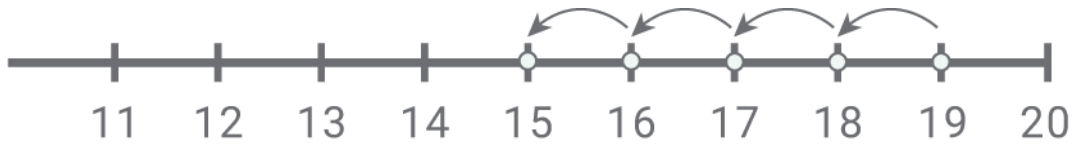


$$10 - \square = 8$$

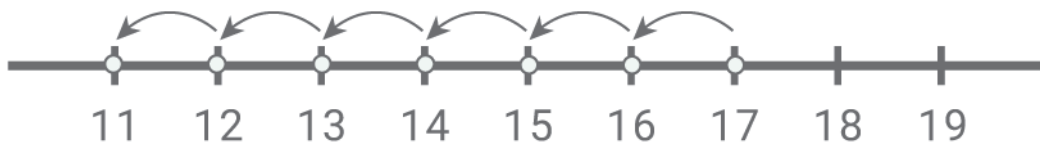
## Subtract with number lines

---

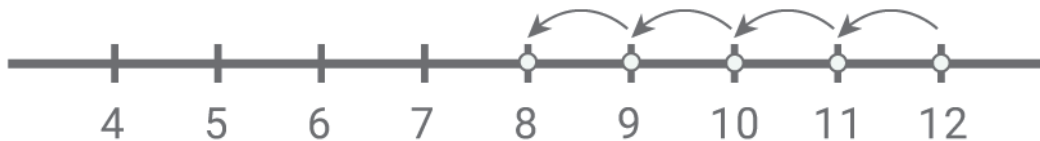
Answers:



$$19 - \boxed{4} = 15$$



$$17 - \boxed{6} = 11$$



$$12 - \boxed{4} = 8$$



$$10 - \boxed{2} = 8$$