

Subtract with number lines

Kindergarten Subtraction Worksheet

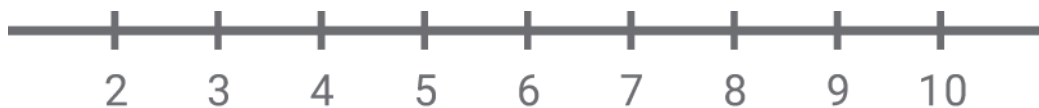
Draw the subtraction hops. Write the difference.



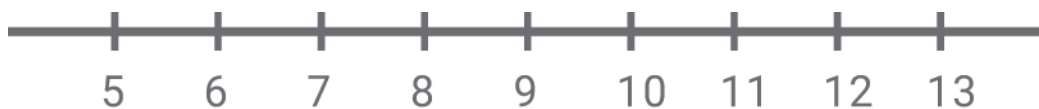
$$17 - 3 = \square$$



$$13 - 5 = \square$$



$$10 - 6 = \square$$



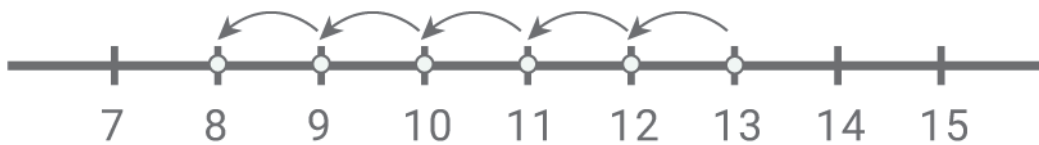
$$11 - 5 = \square$$

Subtract with number lines

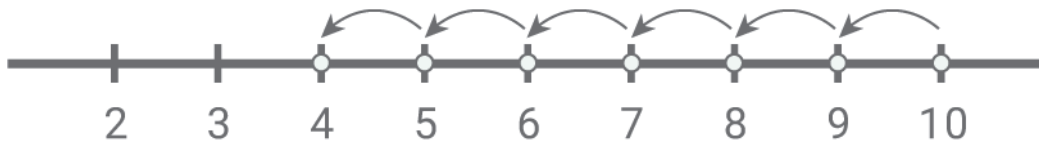
Answers:



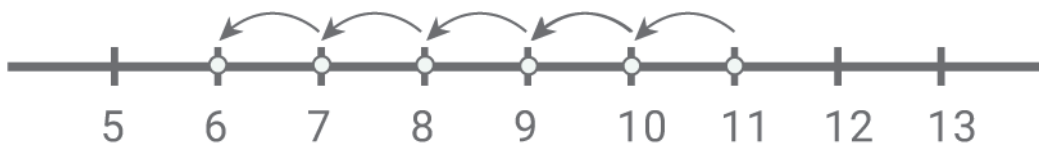
$$17 - 3 = \boxed{14}$$



$$13 - 5 = \boxed{8}$$



$$10 - 6 = \boxed{4}$$



$$11 - 5 = \boxed{6}$$