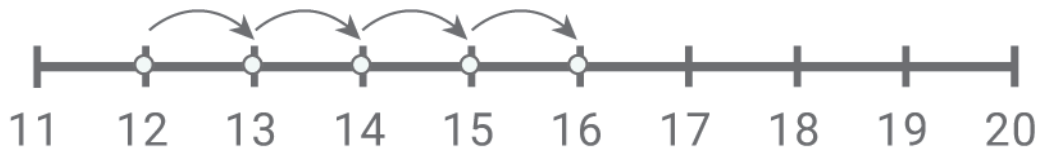


Adding with number lines

Kindergarten Addition Worksheet

Draw the addition hops. Write the missing number.



$$12 + \boxed{} = \boxed{16}$$



$$13 + \boxed{} = \boxed{20}$$



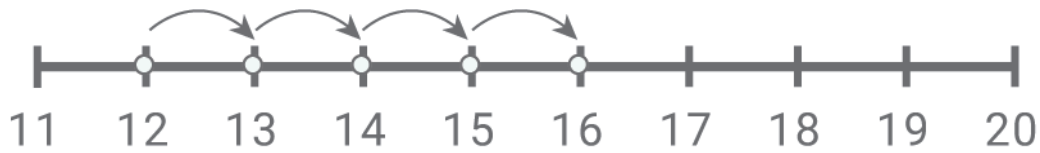
$$8 + \boxed{} = \boxed{17}$$



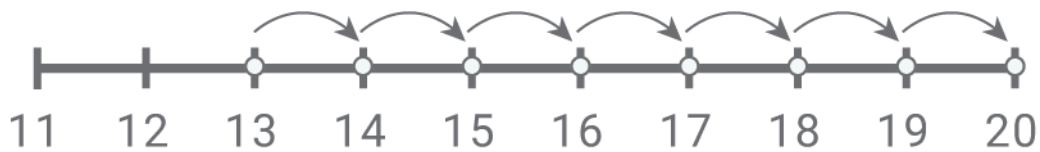
$$7 + \boxed{} = \boxed{10}$$

Adding with number lines

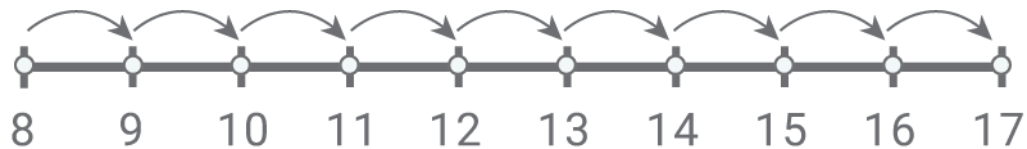
Answers:



$$12 + \boxed{4} = \boxed{16}$$



$$13 + \boxed{7} = \boxed{20}$$



$$8 + \boxed{9} = \boxed{17}$$



$$7 + \boxed{3} = \boxed{10}$$