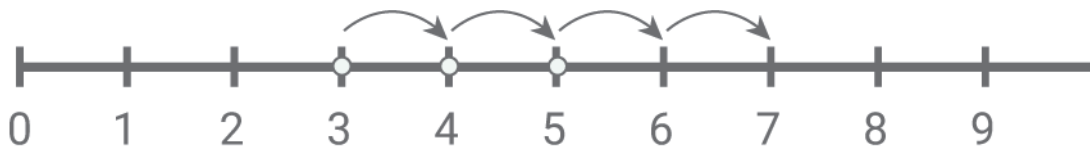


Adding with number lines

Kindergarten Addition Worksheet

Draw the addition hops. Write the sum.



$$3 + 4 = \boxed{7}$$



$$11 + 8 = \boxed{}$$



$$8 + 3 = \boxed{}$$

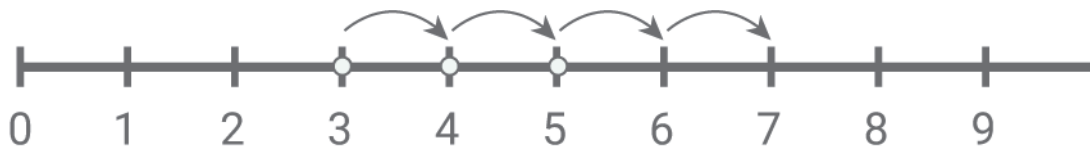


$$9 + 5 = \boxed{}$$

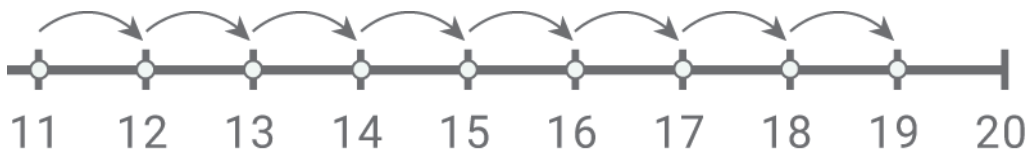
Adding with number lines

Kindergarten Addition Worksheet

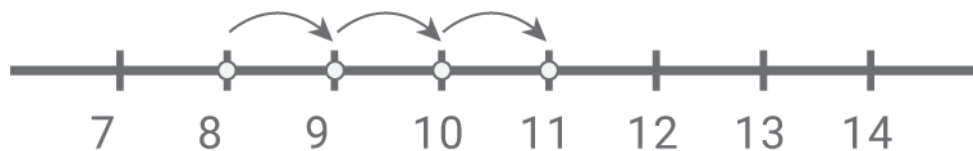
Answers:



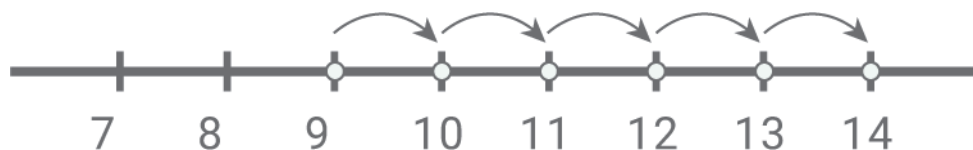
$$3 + 4 = \boxed{7}$$



$$11 + 8 = \boxed{19}$$



$$8 + 3 = \boxed{11}$$



$$9 + 5 = \boxed{14}$$