



Counting pennies, nickels and dimes

Kindergarten Money Worksheet


Count the coins and match their value to the amounts shown.

1.  • 20¢

2.  • 15¢

3.  • 17¢

4.  • 26¢

5.  • 11¢

6.  • 21¢

Counting pennies, nickels and dimes

Kindergarten Money Worksheet

Answers:

